

Total Marks 200

SOCIAL SCIENCE

(English Medium)

Category

A

Seat No. of the Candidate

Block No. of the Candidate

Signature of the Candidate

Signature of the Block Supervisor

Important Instructions for Candidates

- (1) Please do not open the question booklet until you are told to do so.
- (2) During examination, if a candidate is found having any literature guide, guide, piece of paper, handwritten or printed paper, mobile phone, calculator, spy camera, headphone or any other equipments then the candidate will be considered as disqualified.
- (3) During the examination if candidates are found conversing with each other, making noise or not following supervisor's instructions then they will be considered as disqualified.
- (4) After receiving question paper please write your seat number in **OMR SHEET** at the correct given place.
- (5) Please do not write your seat number at any other place than the allotted one in the **OMR SHEET** and if any sign of your identity or recognition is found then you will be considered totally disqualified for the examination.
- (6) Signatures of both the supervisor and the candidate in the certificate of **OMR SHEET** are compulsory without which **OMR SHEET** will not be evaluated, so it is compulsory for the candidate to get signature of the supervisor.
- (7) Candidates can use blue/black ball pen. They cannot use pens or pencils of any other colour and also whitener.
- (8) No marks should be made on any of the options in the question paper.
- (9) There are total 200 questions in this question paper. There is only one answer to each question from the options A, B, C and D. Four options are given for each question. All the questions are compulsory.
Example: What is the capital of Gujarat?
(A) Ahmedabad (B) Gandhinagar (C) Vadnagar (D) Patan
Here, if option (B) Gandhinagar is correct then option (B) in the **OMR SHEET** will have to be darkened with pen. A B C D
- (10) One(1) mark is allotted to each correct answer. For each wrong answer 0.25 marks will be deducted. If a candidate does not want to answer any question then he/she will have to select option E. Negative marking will not be applicable for option E.
- (11) Cross marked answers, answers given on more than one option and answers re-marked after use of blade, eraser or whitener will be given **Negative 0.25 marks.**
- (12) Please hand over the **OMR SHEET** to the block supervisor after completion of examination before leaving the classroom. Any candidate failing to do so will be considered as disqualified for the examination.
- (13) Maximum time allotted for the examination is 180 minutes.
- (14) Most appropriate option will be considered as answer of the question.

Space for Rough Work

- (1) "Provision to parents of giving education opportunity to their children having age 6 to 14 years ." The above section is added in which set of schedule 86 of Indian constitution under fundamental rights?
 (A) Section -11 (B) Section - 2
 (C) Section -86 (D) Section - 4
- (2) Who is the author of life sketch of Mahadevbhai Desai "Agnikund Mein Uga Hua Gulab"?
 (A) Manbhatt (B) Narayan Desai
 (C) Jayshankar Desai (D) Mahadev Desai
- (3) Who is the author of stanza "Harino Marag Che Shoorano"?
 (A) Kavi Preetam Das (B) Manishankar Ratnajee Bhatta
 (C) Damodar Khushal Botadkar (D) Narsinh Mehta
- (4) Function of Union of India is mentioned in which part of Indian Constitution?
 (A) 6 (B) 4
 (C) 5 (D) 2
- (5) Which Indian sportsperson won bronze in 51 kg category in World Boxing Championship?
 (A) Sukhdev (B) Nishant Dave
 (C) Husamuddin (D) Deepak Bhuriya
- (6) To encourage Indian people for independence movement which English newspaper has been started by Gandhiji in India first?
 (A) Young India (B) Youth India
 (C) Vartaman Bharat (D) Aandolan
- (7) In which age Himalayan Mountain Range formed?
 (A) Satyug (age) (B) Archean age
 (C) Jurassic age (D) Tertiary age
- (8) Stars of sky shine because of which effect of Science?
 (A) Diffusion of Light (B) Refraction of light
 (C) Diffraction of light (D) Division of light
- (9) What is the share of industries in gross national production in India?
 (A) 25% (B) 29%
 (C) 32% (D) 39%
- (10) In which part of Indian constitution, fundamental duties have been included?
 (A) Part -3 (A) (B) Part -5 (A)
 (C) Part - 4 (A) (D) Part - 6 (A)

- (11) Who was the first person to receive “Bharat Ratna” ?
(A) Dr. Rajendra Prasad (B) Dr. Sarvepalli Radhakrishnan
(C) Mahadevbhai Desai (D) Lalbahadur Shastri
- (12) In which of the following programmes interactive board is used?
(A) Pragya Abhigam (B) Bal Project
(C) Virtual Classroom (D) Gyankunj Project
- (13) Unique ID of how many digits is given to the students of a secondary school?
(A) 14 (B) 16
(C) 18 (D) 19
- (14) Education is a subject of which list in Indian Constitution ?
(A) Central List (B) State list
(C) Joint List (D) District list
- (15) In which organ, there is insulin production?
(A) Stomach (B) Pancreas
(C) Large intestine (D) Brain
- (16) In which country Hockey World Cup (Mens) - 2023 was organised?
(A) India (B) Japan
(C) France (D) Brazil
- (17) Where is the World’s Biggest Mineral Oil Purification Plant?
(A) Jamnagar (B) Ankleshwar
(C) Digboi (D) Dehradun
- (18) How many leaves including holidays have been decided for Gujarat Secondary and Higher Secondary Schools for the year 2023-24 by Gujarat Secondary and Higher Secondary Education Board?
(A) 79 (B) 80
(C) 81 (D) 82
- (19) According to National Education Policy-2020, which institution has been authorized for monitoring of minimum commercial and quality standards followed by State/Central Schools?
(A) PARAKH (B) SWAYAM
(C) DIKSHA (D) SSSA
- (20) Up to which class education is expected in mother tongue in National Education Policy 2020?
(A) Class 6 (B) Class 8
(C) Class 10 (D) Class 5

- (21) If the syllabus is changed because of business and industries then this is considered as effect of which factors on educational objectives?
- (A) Cultural factors (B) Social factors
(C) Economical factors (D) Ethical factors
- (22) “Without thinking on what a person is doing what he should do”? This thought is connected with which goals of education ?
- (A) Ethical goals (B) Goals of attaining knowledge
(C) Goal of complete life (D) Goals of good use of free time
- (23) Objectives, syllabus, institutions and time limit if all of these are decided then this is considered as which form of education?
- (A) Informal (B) Formal
(C) Illegal (D) Joint
- (24) Which program does not directly apply to Informal learning?
- (A) Knowledge of alphabets (B) Examination
(C) Education of business (D) Deaddiction
- (25) Which of the following issues is not included in three issues of learning process?
- (A) Starting (B) Result
(C) Process (D) Evaluation
- (26) Some children are introverts, some are extroverts, some are talkative and some of them are shy. This type of difference in children is known as -
- (A) Physical difference (B) Difference in personality
(C) Difference in hobbies (D) Social difference
- (27) Which of the following is not included in different intelligence quotients ?
- (A) Intelligence Quotient (I.Q.) (B) Spiritual Quotient (S.Q.)
(C) Regional Quotient (R.Q.) (D) Emotional Quotient (E.Q.)
- (28) Who has developed vocational interest modification?
- (A) McDougall (B) Strong
(C) Morgan (D) Garrett
- (29) Which experiment is used to measure abilities/powers like Art, Music, Creativity in a person?
- (A) Attitude Criteria (B) Interest experiment
(C) Zest/Rasa modification (D) Aptitude experiment
- (30) Which is not included in three types of internal processes in a class?
- (A) Teacher-Student Behaviour (B) Student-Material Behaviour
(C) Teacher-Material Behaviour (D) Student-Student Behaviour

- (31) Which of the following is not included in commonly used three middle position statistical measures?
(A) Mean (B) Median
(C) Mode (D) Midpoint
- (32) Which is different from the three tests of evaluation ?
(A) Written (B) Oral
(C) Practical (D) Functional
- (33) With which of the following is spreadsheet related?
(A) Microsoft Excel (B) Microsoft Powerpoint
(C) Microsoft Word (D) Access
- (34) Whose philosophy of education is shown in “Framing and Clading” ?
(A) Gijubhai Badheka (B) Nanabhai Bhatt
(C) Taraben Modak (D) J. Krishnamurti
- (35) Education by productive labour, for productive labour, and can only be of productive labour”
(A) Mahatma Gandhiji (B) Ravindranath Tagore
(C) Mr. Arvind (D) Swami Vivekananda
- (36) Which of the following principles is not included in principles of John Dewey?
(A) Principle of utility (B) Principle of inclination
(C) Principle of labour (D) Principle of zest(rasa)
- (37) New India Literacy Program (NILP) has been started for illiterates of which age group?
(A) 15 years and above (B) 15 years to 55 years
(C) 6 years to 14 years (D) 21 years to 65 years
- (38) Which is known as one nation one digital platform ?
(A) PM eVIDYA (B) BISAG-N
(C) DIKSHA (D) Vande Gujarat Channel
- (39) Who talked about learning by senses ?
(A) Dr. S. Radhakrishnan (B) Ravindranath Tagore
(C) Mahatma Gandhi (D) Maharishi Arvind
- (40) Who started learning by senses for special children?
(A) Maria Montessory (B) Grace Fernold
(C) Jim Piaget (D) Ivan Pavlov

- (41) Which of the following pairs of psychologists associated with study is correct?
 (A) Trial and Error - Vygotsky (B) Behaviourism - Pavlov
 (C) Constructivism - Skinner (D) Conditioning by factors – Thorndike
- (42) Which of the following is not a characteristic learning process?
 (A) Experience is necessary for learning
 (B) Interaction with environment is necessary for learning
 (C) Learning can enter from one condition to the other
 (D) Memory is necessary for learning
- (43) Who gave Discovery learning approach ?
 (A) Robert Gagne (B) Jerome Brunner
 (C) Bandura (D) Ausubel
- (44) What will be the area of a circle having radius 14 cm? A formula is used by children to answer this question. Which intellectual skill he or she has obtained?
 (A) Differentiation (B) Concept
 (C) Rule (D) Solution of the problem
- (45) In which of the following disorders intellectual skill of children destroys?
 (A) Down Syndrome (B) ADHD
 (C) Cerebral Palsy (D) Autism
- (46) Which of the following will be on top level according to Bloom's Taxonomy?
 (A) Evaluation (B) Creation
 (C) Isolation (D) Utilization
- (47) Which of the following is unsuitable in achievement test ?
 (A) Sufficient time given to the students to answer all of the questions
 (B) Class is related with progress(development)
 (C) Education work is given at the end
 (D) Questions are selected to test the skills of a student
- (48) Which of the following measurements of middle position cannot be shown?
 (A) Mean (B) Extension
 (C) Median (D) Mode
- (49) Which of the following is not true for standard deviation (σ)?
 (A) Group Category will be as much as the low value of standard deviation
 (B) Standard deviation increases by the addition of any constant number in marks
 (C) If all the marks are multiplied by only one number then standard deviation increases at the same rate
 (D) Standard deviation is used to know the variability of the marks

- (50) Which of the following is not a characteristic of E-content?
 (A) These are only in digital format
 (B) It is presented by webpage or any other medium
 (C) It contains only animation
 (D) It can be linked with QR code.
- (51) Which of the following is not OER ?
 (A) BISAG - N (B) GROWER
 (C) NROER (D) e-pathshala
- (52) Which of the following subjects (issue) does not apply in the concept of E-learning?
 (A) Learning-Teaching is a present time field. (B) Learning has only one option.
 (C) Class learning is interesting (D) Information is available online.
- (53) Summary of which cannot be applied excepting its related groups. This is what type of modification?
 (A) Experimental modification (B) Survey
 (C) Basic Modification (D) Functional modification
- (54) "Children is creator of knowledge and not consumer." This is the conclusion of –
 (A) Behaviourism (B) Naturalism
 (C) Rationalism (D) Constructivism
- (55) Learning is a natural process and not manmade. Who gave this concept?
 (A) Aristotle (B) Rousseau
 (C) Froebel (D) Montessori
- (56) R, U, X, A, D, ? To complete the series what will replace the "?" question mark
 (A) F (B) G
 (C) H (D) I
- (57) 1, 3, 3, 6, 7, 9, 9, 12, 21, ? To complete the series what will replace the "?" question mark
 (A) 10 (B) 11
 (C) 12 (D) 13
- (58) 10, 100, 200, 310, ? To complete the series what will replace the "?" question mark
 (A) 400 (B) 410
 (C) 420 (D) 430
- (59) In a certain code TEACHER is written as VGCEJGT then in the same code CHILDREN can be written as?
 (A) EJKNEGTP (B) EGKNFITP
 (C) EJKNFGTO (D) EJKNFTGP
- (60) In a certain code TWENTY is written as 863985 and ELEVEN is written as 323039 then in the same code TWELVE can be shown by which number?
 (A) 863203 (B) 863584
 (C) 863903 (D) 863063

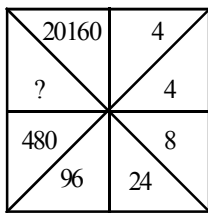
(61) In a certain code language '123' means 'bright little boy' and 145 means 'tall big boy'. In the same way '637' means 'beautiful little flower' then which number will be there for 'bright' ?

- (A) 1 (B) 2
(C) 3 (D) 4

(62) If + means \times , \times means $-$, \div means $+$ and $-$ means \div then which of the following numbers will be the solution of $175 - 25 \div 5 + 20 \times 3 + 10$

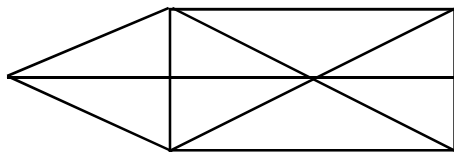
- (A) 77 (B) 160
(C) 240 (D) 2370

(63) Select the appropriate option for ' ? ' in the following figure



- (A) 860 (B) 1140
(C) 2880 (D) 3240

(64) How many triangles are there in the given figure?



- (A) 15 (B) 16 (C) 17 (D) 18

(65) What will be the angle in degrees between minute and hour hand of a clock at 3:40 ?

- (A) 140 (B) 150 (C) 130 (D) 120

(66) Select the odd pair:

- (A) Yoghurt - milk (B) Sandal - leather
(C) Peanut - oil (D) Sugar - sugarcane

(67) Arrange the letters of the given word alphabetically.

(1) INTERANAL (2) INSECT (3) INCOME (4) INTERN (5) INSIDE

- (A) 3, 2, 5, 4, 1 (B) 3, 4, 5, 2, 1
(C) 4, 5, 1, 3, 2 (D) 3, 1, 2, 4, 5

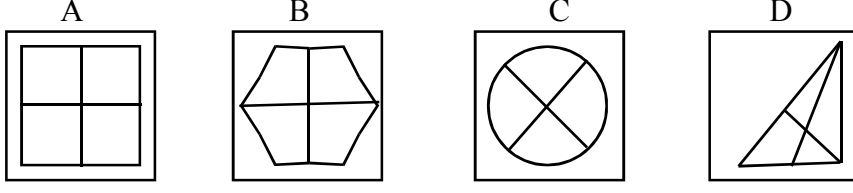
(68) If first day of a leap year is Sunday then how many Sundays will be there in the same year?

- (A) 50 (B) 51 (C) 52 (D) 53

(69) A person drives his car 50 km towards east after that he turns right and drives 30 km. Then he turns west and drives 10 km. How much away he is from the starting point?

- (A) 20 km (B) 50 km (C) 100 km (D) 60 km

(70) Select the different figure.



(A) A (B) B (C) C (D) D

(71) અગ્નિનો સમાનાર્થી છે.

(A) અનલ (B) અનિલ (C) અનંગ (D) તપસ

(72) નીચેનામાંથી કર્મધારેય સમાસનું ઉદાહરણ છે.

(A) તકસાધુ (B) કલ્પવૃક્ષ (C) પંચામૃત (D) પરમેશ્વર

(73) તમારાથી વડીલો સામે ઊંચા અવાજે ન બોલાય. - વાક્યનો પ્રકાર ઓળખો.

(A) કર્તારિ (B) કર્મણિ (C) ભાવે (D) પ્રેરક

(74) સફળતા જિંદગીની હસ્તરેખામાં નથી હોતી, ચણાયેલ ઈમારત એના નકશામાં નથી હોતી. આ કાવ્યનો પ્રકાર જણાવો.

(A) દુહા (B) મુક્તક (C) હાઈકુ (D) સોનેટ

(75) ખોટી જોડણી કઈ છે ?

(A) સુદંઢ (B) દીકરી (C) અકસ્માત્ (D) કનિષ્ઠ

(76) 'નીરવ' શબ્દનો વિરુદ્ધાર્થી શબ્દ શું થાય ?

(A) સૂમસામ (B) ઘવલ (C) પીડા (D) કોલાહલ

(77) સમાનાર્થી શબ્દોની ખોટી જોડ હોય તે વિકલ્પ કયો છે ?

(A) ખોભણ - ગુફા (B) અનરવો - હિંમતવાન (C) અડવડિયું - લથડિયું (D) આર્દ્રતા - મૃદુતા

(78) 'ઘોડાના સવારને બેસવા માટે ઘોડાની પીઠ પર રાખવાનું રૂ કે ઊંનનું આસન' - શબ્દસમૂહ માટેનો એક શબ્દ કયો છે?

(A) દળી (B) ટેકણિયું (C) પીઠિકા (D) માંચડો

(79) વિરામચિહ્નોનો ઉચિત પ્રયોગ ન થયો હોય તેવું વાક્ય કયું છે ?

(A) હાશ ! હવે નિરાંત થઈ !
 (B) પ્રશ્નપત્ર જોઈ વિદ્યાર્થીઓ મૂંઝાયા, એમને કાંઈ સૂઝ પડી નહીં, ઉત્તરપત્રો મૂકી દઈને ચલતી પકડી.
 (C) મેં જાણ્યું : મારાં લખાણો એને ગમતાં નથી.
 (D)તો મારો દુશ્મન છે.

(80) શબ્દ અને તેના અનેકાર્થી શબ્દોની ખોટી જોડ હોય તેવો વિકલ્પ કયો છે ?

(A) ગુણ - પણછ, દોરું (B) કૂટ - ઠગાઈ, શિખર
 (C) કાંત - મન, અંતઃકરણ (D) કર - કિરણ, સૂંઢ

(81) આપેલ વાક્યોમાં રેખાંકિત કરેલ શબ્દનો ઉચિત પ્રયોગ થયો હોય તેવું વાક્ય કયું છે ?

(A) મેં આ પત્ર કે ઠરાવ વાંચ્યા નથી. (B) કામ વેળાસર થાય તે જ અગત્યનું છે.
 (C) સાંજે છ વાગે જાહેર ગ્રંથાલય બંધ થાય છે. (D) દરેકે આવકમાંથી યથાશક્તિ પ્રમાણે દાન કરવું જોઈએ.

- (82) 'દેવ્યૈશ્વર્ય' શબ્દનો સંધિવિગ્રહ શું થાય ?
 (A) દેવ + ઐશ્વર્ય (B) દેવે + એશ્વર્ય
 (C) દેવ્ય + ઐશ્વર્ય (D) દેવી + ઐશ્વર્ય
- (83) આપેલાં વાક્યોમાં 'કર્મણિ વાક્ય' કયું છે ?
 (A) એ સમયમાં લોકો જુગાર રમતા. (B) એણે પચાસ માણસોને જમાડ્યા.
 (C) સરકાર તરફથી આ મહિને અનાજ અપાયું છે. (D) અશોક કંઈ બોલ્યો ન હોત.
- (84) 'છત્રી પર નામ-સરનામું લખવાનો ઉપાય ખરેખર કારગત નીવડ્યો.' - વાક્યમાં રેખાંકિત કરેલ શબ્દ 'ખરેખર' ક્રિયાવિશેષણનો કયો પ્રકાર છે ?
 (A) અભિગમવાચી ક્રિયાવિશેષણ (B) સમયવાચક ક્રિયાવિશેષણ
 (C) રીતિવાચક ક્રિયાવિશેષણ (D) સ્થાનવાચક ક્રિયાવિશેષણ
- (85) 'મારો હંસલો નાનો ને દેવળ જૂનું રે થયું.' - અલંકાર ઓળખાવો.
 (A) વ્યક્તિરેક અલંકાર (B) અતિશયોક્તિ અલંકાર
 (C) રૂપક અલંકાર (D) ઉપમા અલંકાર
- (86) Mahesh was too smart. (Remove 'too' without changing the meaning.)
 (A) Mahesh was not smart at all.
 (B) Mahesh was smart more than required.
 (C) Mahesh was foolish.
 (D) I was doubtful whether Mahesh was smart or not.
- (87) INS Arihant is Indian Naval ship. (Fill in the blanks)
 (A) The & an (B) An & an
 (C) A & an (D) The & the
- (88) Most students have brought their homework. of them have not completed it yet.
 (A) None (B) Few
 (C) Each (D) A little
- (89) મેં મારા વાળ કપાવ્યા. - આ વાક્યનું ચોક્કસ અંગ્રેજી ભાષાંતર શું થશે ?
 (A) I cut my hair. (B) I clipped my hair.
 (C) I got my hair cut. (D) I had a nice hair cut.
- (90) Give the nearest meaning of word : 'Phantom'.
 (A) existent (B) imaginary
 (C) corporeal (D) tangible
- (91) Give the verb form of 'little'.
 (A) alittle (B) unlittle
 (C) belittle (D) bilittle

- (92) Change the voice : “What caused COVID-19 ?”
 (A) What was COVID-19 caused by ? (B) What was caused by COVID-19 ?
 (C) By what is COVID-19 caused ? (D) By what COVID-19 was caused ?
- (93) Select the word or phrase which is closest to the opposite in meaning of the underlined word : “Rahul will never accept your request.”
 (A) turn over (B) turn down
 (C) turn up (D) reject
- (94) Add a suitable question tag : Radha, one of my neighbours slipped off a staircase. ?
 (A) did she (B) does she
 (C) doesn't she (D) didn't she
- (95) Fill in the blanks with appropriate set of prepositions : Nidhi travelled her mother all the world when she was 17 years old.
 (A) by, above (B) for, around
 (C) with, around (D) with, over
- (96) Turn this sentence into English : “હજુ પણ હું તેને ત્યાં એકલી ઊભેલી જોઈ શકતો હતો.”
 (A) I could still saw her standing there alone. (B) I could still see her stood there alone.
 (C) I could still see her standing there alone. (D) I can still see her standing there alone.
- (97) Fill in the blanks with the appropriate word / words : Rohan and Nayan have been on vacation May 2023. They to Manali for a week.
 (A) for, had gone (B) since, had gone
 (C) for, have gone (D) since, have gone
- (98) Mantra got the first prize last week. Find out the correct option to get the underlined answer.
 (A) Which prize did Mantra get last week ?
 (B) When did Mantra get the first prize ?
 (C) Which prize Mantra got last week ?
 (D) Where did Mantra get the first prize ?
- (99) Ravi in this company for five years. Find out correct form of verb from the options.
 (A) works (B) is working
 (C) has been working (D) have worked
- (100) Find out the correct spelling from the options.
 (A) Spactacular (B) Spectacular
 (C) Spactaculor (D) Specteculor

- (101) Which among the following is not a natural heritage?
 (A) Landscape (B) Himalayas (C) Ellora caves (D) Godavari river
- (102) Naklang fair is held on which day of Hindu calendar?
 (A) Kartika sud poonam (B) Falgun sud poonam
 (C) Magha sud poonam (D) Bhadarva amavasya
- (103) Among the following which Ved is associated with music?
 (A) Rigveda (B) Samaveda (C) Atharvaveda (D) Yajurveda
- (104) The Chakra placed on National flag is taken from which of these sculptures?
 (A) Chariot temple (B) Ajanta caves
 (C) Pillar sculpture of Sarnath (D) Sanchi Stupa
- (105) Kathakali is a famous dance of which state?
 (A) Andhra Pradesh (B) Kerala (C) Karnataka (D) Odissa
- (106) Sun temple at Modhera is constructed in which AD?
 (A) 1200 AD (B) 1026 AD (C) 1006 AD (D) 1060 AD
- (107) Under which government Act employees are supposed to finish their work in time?
 (A) Anti-corruption Act (B) Right to Information Act
 (C) Money laundering Act (D) Black money Act
- (108) In the olden days Goa was the capital of
- (A) Dutch (B) Portuguese (C) French (D) British
- (109) Which of the following state was merged into Andhra Pradesh in the year 1956?
 (A) Tamil Nadu (B) Telangana (C) Mysore (D) Hyderabad
- (110) Which of the following organisations regulates quality of edible items?
 (A) BIS (B) CAC (C) ISO (D) FPO
- (111) The organisation working for human development is
- (A) FAO (B) WTO (C) UNO (D) UNDP
- (112) Among the given countries which is the correct order in decreasing order of human development?
 (A) India, Sri Lanka, Nepal, Bhutan (B) Sri Lanka, Bhutan, India, Nepal
 (C) Sri Lanka, India, Bhutan, Nepal (D) Sri Lanka, India, Nepal, Bhutan
- (113) Permission of free collection of salt for the manufactures of salt by person near sea coast was main matter of
- (A) Second round table conference. (B) Gandhi Irwin pact
 (C) Rowlett act (D) Dandi yatra

- (114) The provisional Government formed by Netaji was recognised by countries.
 (A) Germany, Japan, France (B) Germany, Burma, Russia
 (C) Russia, Germany, Italy (D) Japan, Germany, China
- (115) Which of the following statement is not correct in relation to agriculture?
 (A) It provides largest employment (B) India ranks first in agriculture production
 (C) It holds 17% of GDP in India. (D) Industries depend on agriculture.
- (116) Which of the following is a technical reform in agriculture?
 (A) NAFED (B) GROFED (C) ICAR (D) NDDB
- (117) Monetary measures are adopted by
 (A) State bank of India (B) Government of India
 (C) Central bank of India (D) Indian bank
- (118) Under which Government yojana person between 18-65 year educated up to 4th class is given training to develop traditional craft for self employment.
 (A) Bajpai Bankable Yojana (B) Mission Mangalam.
 (C) Adarsh Gram Yojana (D) Annapurna Yojana.
- (119) Choose the right match :
- | A | B |
|-------------------------|-------------------------|
| 1. Stratified rock | A. Granite |
| 2. Metamorphic rock | B. Limestone |
| 3. Igneous rock | C. Marble |
| (A) (1-B), (2-C), (3-A) | (B) (1-A), (2-C), (3-B) |
| (C) (1-C), (2-B), (3-A) | (D) (1-B), (2-A), (3-C) |
- (120) How many subjects are included in union list?
 (A) 66 (B) 78 (C) 82 (D) 97
- (121) Which amendment of Indian constitution the term 'secular' is added to the preamble.
 (A) 46 (B) 45 (C) 32 (D) 22
- (122) Among the following which crop is good to reduce malnutrition?
 (A) Rice (B) Wheat (C) Corn (D) Nagli
- (123) When did India adopt the liberalization policy?
 (A) 1991 (B) 1990 (C) 1992 (D) 1994
- (124) Sahastralinga lake was built by
 (A) Bhimdev (B) Rani Roopmati (C) Rani Udaymati (D) Siddraj Jaysingh

- (125) Second World war was led to the liberation of nations of Africa.
 (A) Backward (B) Developing (C) Developed (D) Enslaved
- (126) Which Day was celebrated as the UN day?
 (A) 24th October (B) 24th December (C) 22th January (D) 22th March
- (127) Who had established the Aarzi Hukumat?
 (A) Shamal Das (B) Government of India
 (C) People of Junagadh (D) Ratubhai Adani
- (128) Choose the correct match from the given options :
- | A | B |
|---------------------|-----------------------|
| 1. Black soil | 1. Iron and aluminium |
| 2. Red soil | 2. Mineral oil |
| 3. Laterite soil | 3. Regur |
| 4. Stratified rocks | 4. Graphite |
| | 5. Iron |
- (A) (1-5), (2-4), (3-2), (4-3) (B) (1-3), (2-4), (3-5), (4-1)
 (C) (1-4), (2-3), (3-4), (4-5) (D) (1-5), (2-4), (3-4), (4-1)
- (129) The government step taken to control prices is
 (A) PDS (B) FPS (C) PASA (D) CAC
- (130) The longest Railway route in India is
 (A) Mumbai - Howrah (B) Delhi - Kolkata
 (C) Ahmedabad - Howrah (D) Dibrugarh - Kanyakumari
- (131) Kathakali narrates the life events of
 (A) Sri Ram (B) Mahadev (C) Maa Durga (D) Sri Krishna
- (132) Who among the following is not considered as a jewel of music in 15th century?
 (A) Bajju Bavara (B) Tansen (C) Tana-Riri (D) Tulsi Das
- (133) Which among the following belongs to Junagadh?
 (A) Victory tower (B) Sun temple
 (C) Inscription of king Ashoka (D) Tomb of Mohabat
- (134) Which of the following places of Gujarat is known for making the store ornaments?
 (A) Surat (B) Rampur (C) Junagadh (D) Khambhat
- (135) What do you mean by 'Sapta Sindhu'?
 (A) Group of mountains (B) Group of oceans (C) Group of tribes (D) Group of rivers

- (136) What is the average life of person in India according to 2015 report?
 (A) 63.5 (B) 65.7 (C) 65.5 (D) 62.5
- (137) Jute mills are located on the banks of which river?
 (A) Ganga (B) Godavari (C) Narmada (D) Hoogli
- (138) What is the rank of India in the world in the production of Iron and Steel?
 (A) First (B) 3rd (C) 5th (D) 6th
- (139) Among the following which national highway passes through Gujarat?
 (A) 57 (B) 142 (C) 141 (D) 47
- (140) Chattisgarh: Highest poverty in India; _____: lowest poverty in India.
 (A) Kerala (B) Gujarat (C) Tamil Nadu (D) Goa
- (141) GST: 2017; Agro business policy: _____.
 (A) 2014 (B) 2015 (C) 2016 (D) 2018
- (142) According to HDR 2015 in the context of HDI, Norway was at the first rank. Which country was the second?
 (A) India (B) Japan (C) America (D) Australia
- (143) Piyush has purchased a mobile worth Rs. 89,990/- from JAS mobile store. He was exploited and wanted to file a complaint. Kindly advice him where he can file a complaint?
 (A) High Court (B) Supreme Court (C) State Commission (D) District Forum
- (144) Jagdish was restricted to enter the bathing ghat at Varanasi. Which article of Constitution of India is infringed?
 (A) Article 12 (B) Article 14 (C) Article 15 (D) Article 17
- (145) Pick out the correct meaning listed below to define 'average income'.
 (A) Average income of the country means the total income of the country.
 (B) The average income in a country is the income of only employed people.
 (C) The average income is the same as per capita income.
 (D) The average income includes the value of property held.
- (146) Which country can be considered as a developed country in the modern world? Select your answer from the following statements.
 (A) Countries which have accumulated huge amount of wealth and always secures the future of their citizens. These countries are considered to be developed.
 (B) Countries which are among the highest in the 'Human Development Index' are considered to be the developed countries.
 (C) Only rich countries are considered to be developed because people have money to buy everything needed for human beings—both material and non-material.
 (D) Russia is a rich country and therefore it is a developed country.

- (147) Arrange national waterways of India from South to North in correct order.
 (1) National Waterway No. 4 (2) National Waterway No. 3
 (3) National Waterway No. 5 (4) National Waterway No. 1
 (5) National Waterway No. 2
 (A) 3, 4, 5, 1, 2 (B) 3, 5, 2, 1, 4 (C) 5, 3, 2, 4, 1 (D) 3, 4, 1, 5, 2
- (148) In the matters of balanced development, the factors due to which Regional Inequality is seen, which one is not included in them?
 (A) The tug of war to take development programmes due to political reasons.
 (B) Position of nation is higher than regions.
 (C) Regional pressure.
 (D) Sources for development
- (149) As per UNDP-2015, in the year 2011-12 in Gujarat, the ratio of poverty was between 10%-20%. What was the exact proportion?
 (A) 13.7% (B) 14.2% (C) 16.20% (D) 16.63%
- (150) As per UNDP-2015, in the year 2011-12 in Gujarat, the ratio of poverty was between 10%-20%. What was the exact proportion?
 (A) 13.7% (B) 14.2% (C) 16.20% (D) 16.63%
- (151) Which of the following statements is applicable to unclassified forests?
 (A) These forests are under direct control of the government.
 (B) Here, there are no restrictions on cutting of wood or grazing of cattle.
 (C) These forests belong to individuals or families
 (D) These forests are controlled by local self-government institutions.
- (152) Which of the following pairs is not correct ?
 (A) Portugal : Portuguese tribe (B) Netherland : Britisher
 (C) Denmark : Danish tribe (D) Holland : Dutch tribe
- (153) Germany defeated France in the Sedan war in 1871 A.D. and forced France to sign which treaty ?
 (That became the main cause of First World War.)
 (A) Frankfurt Treaty (B) Versailles Treaty (C) Starve Treaty (D) Secret Treaty
- (154) Compulsory military training had started in some provinces of Europe and production of weapons were increased under the pretext of self-defence. Which factor can be considered responsible for that ?
 (A) Militarism (B) Communism (C) Colonialism (D) Imperialism
- (155) Due to "Divide and Rule" policy of Britishers which movement got impetus along with Boycott and Indigenous Movements?
 (A) Khilafat Movement (B) Bangbhang Movement
 (C) Non-cooperation Movement (D) Quit India Movement

- (156) The movement due to that Congress became an organization of the people, schools began giving national education, Hindi started getting more importance than English and this movement spread to the people of villages. Which movement can it be?
- (A) Khilafat movement (B) Quit India movement
(C) Breaking of law with honour (D) Non-cooperation movement
- (157) Arrange the following events in the correct order as per their time.
- (i) Establishment of United Nations. (ii) Beginning of Second World War
(iii) Establishment of League of Nations (iv) Beginning of First World War
(A) 4, 3, 2, 1 (B) 3, 4, 1, 2 (C) 2, 3, 1, 4 (D) 4, 3, 1, 2
- (158) America, the Soviet Union and the Britain agreed on maintaining control over nuclear production, experiment and proliferation. This agreement is known as _____.
- (A) Partial Nuclear Test Ban Treaty (B) Universal Acceptor Nuclear Test Treaty
(C) Universal Acceptor Nuclear Ban Treaty (D) Frankfurt Treaty
- (159) One pair is not appropriate for the pairs of Rajyasabha.
- (A) Rajyasabha : It is a permanent house.
(B) Chairman : The Vice President of India by virtue of his office holds the chairmanship of Rajyasabha.
(C) Dr. Sarvepalli Radhakrishnan : He was the first chairman of the Rajyasabha.
(D) Gujarat: Representation of 15 seats in Rajyasabha.
- (160) Civil Cases : District Judge; Criminal Cases: _____.
- (A) Tribunals (B) Sessions Judge
(C) Court of Small Causes (D) Civil Judge
- (161) Match the pairs :
- | A | B |
|--------------------------------------------------------|-----------------------------------------------------------------------------------|
| 1) Sessions Court | a) For free support and guidance. |
| 2) 'Gujarat Educational Organisation Service Tribunal' | b) To impart speedy justice to the poor and downtrodden. |
| 3) Lok Adalats | c) Power to sentence imprisonment from 3 to 10 years. |
| 4) 'Legal Aid Service Center' | d) For the protection of service and other rights of the teachers and professors. |
- (A) (1- b), (2 - c), (3 - d), (4 - a)
(B) (1 - c), (2 - d), (3 - a), (4 - b)
(C) (1 - c), (2 - d), (3 - b), (4 - a)
(D) (1 - d), (2 - c), (3 - b), (4 - a)
- (162) 'Surveys are carried out to know public opinion with the help of some details.' One of the following is related to the statement. Which one is that ?
- (A) Elections (B) Opinion Polls (C) Government (D) Democracy

- (163) A party that secures more than four percent of the total votes in the previous general elections in at least four major states is identified as which party?
 (A) opposition party (B) regional party (C) national party (D) independent
- (164) Arrange the following states in order from north to south : Uttarakhand, Kerala, Madhya Pradesh, Andhra Pradesh, Delhi
 (A) Uttarakhand, Delhi, Madhya Pradesh, Andhra Pradesh, Kerala
 (B) Kerala, Andhra Pradesh, Madhya Pradesh, Delhi, Uttarakhand
 (C) Andhra Pradesh, Madhya Pradesh, Uttarakhand, Delhi, Kerala
 (D) Kerala, Andhra Pradesh, Delhi, Madhya Pradesh, Uttarakhand
- (165) Satluj, Beas, Ravi and Jhelum rivers are tributaries of Sindhu river. Near which place of Pakistan do these five rivers meet Sindhu river ?
 (A) Pathankot (B) Peshavar (C) Khaibar Ghat (D) Mithankot
- (166) One statement is not correct for seasonal change.
 (A) Due to axial tilt of the earth Sun moves around four sides of the earth.
 (B) Sun rays are perpendicular over tropic of Cancer on 21 st June so the days are longer.
 (C) The axis of the earth is tilted at 23.5° and makes an angle of 66.5° with the orbit.
 (D) Sun rays fall vertically over Tropic of Capricorn on 22nd December so the southern hemisphere experiences summer and northern hemisphere experiences winter.
- (167) Which of the following statement for the celebration of fair is incorrect?
 (A) Maharashtra : Ardha kumbh mela is famous in Nasik.
 (B) Himachal Pradesh : Dashera fair is organised in Kullu.
 (C) Uttarakhand : Magh fair is celebrated.
 (D) Punjab : Famous for martyr's fair.
- (168) The figure of a bullock on an inverted lotus was found in which age?
 (A) Huns (B) Gupta Age (C) Mauryan age (D) Vijaynagar Dynasty
- (169) With reference to the Bhimbetka paintings, choose the incorrect option.
 (A) Geometrical Designs (B) Human fingers
 (C) Rhinoceros (D) Birds
- (170) Palitana Temple: Shetrunjay Mountain ; Hathisinh Temple: _____.
 (A) Rajkot (B) Porbandar (C) Surat (D) Ahmedabad
- (171) Lothal had a unique featured system of _____.
 (A) Granary (B) Dockyard (C) Drainage (D) Sewage
- (172) Kamban: Ramayan in Tamil; Ramayan in Bengali: _____.
 (A) Rabindranath Tagore (B) Bankim Chandra Chatterjee
 (C) Saratchandra (D) Krita Vasa

- (173) Rahul is residing in that city where the masterpiece of sculpture of Nataraja is preserved. Name the city.
 (A) Jabalpur (B) Bhagalpur (C) Bangalore (D) Chennai
- (174) The sign addition (+) and subtraction (-) are the brain child of which expert?
 (A) Katyayan (B) Aryabhata (C) Bhaskaracharya (D) Baudhayana
- (175) National Parks in India: 103 ; National Parks in Gujarat: _____.
 (A) 02 (B) 03 (C) 04 (D) 06
- (176) GROFED stands for?
 (A) Gujarat Co-operative Oil seeds and Gramin Federation
 (B) Gujarat Co-operative Oil seeds savers and Growers Federation
 (C) Gujarat Co-operative Oil seeds savers and Gramin Federation
 (D) Gujarat Co-operative Oil seeds Growers Federation
- (177) Due to implementation of which process, Mark is able to do business in India since 1991?
 (A) World business (B) Multi business (C) Globalization (D) None of the above
- (178) Choose the odd one out with respect to wheat producing states.
 (A) Madhya Pradesh and Maharashtra (B) Rajasthan and Gujarat
 (C) West Bengal (D) Andhra Pradesh and Karnataka
- (179) I am the 'Denim city of India'. Who am I?
 (A) Porbandar (B) Rajkot (C) Ahmedabad (D) Surat
- (180) Porbandar is the _____ port for the entire year.
 (A) free (B) chargeable (C) banned (D) None of these
- (181) Four students were discussing about the best friend of a social science teacher as follows who among them is correct?
 Student 1. Chalk and duster is the best friend of social science teacher.
 Student 2. Students are his best friend he talks much with students than other teachers.
 Student 3. Text book is his best friend he never comes without one..
 Student 4. Map is the best friend of social science teacher.
 (A) Student 1 (B) Student 2 & 3 (C) Student 3 & 1 (D) Student 4 only
- (182) In a classroom if a student voluntarily shares his knowledge and the teacher appreciates the student then it will create
 (1) Create jealous among students. (2) Will encourage the student
 (3) Will create a competitiveness in students (4) Will have no impact in class.
 (A) 1 (B) 2 (C) 3 & 4 (D) 2 & 3

- (183) Which of the following is a limitation of short answer type questions?
 (1) It is time saving for student and teacher both.
 (2) It will not enhance the presentation skills of the student.
 (3) It is object oriented.
 (4) It makes the students to study in detail.
 (A) 1 & 2 (B) Only 2 (C) 3 & 4 (D) Only 4
- (184) Find the statement that is not valid regarding teaching through group activity.
 (1) It helps the student for self study. (2) It creates curiosity to perform better.
 (3) It makes class active. (4) It does not support of a teacher.
 (A) Only 1 (B) Only 3 (C) Only 2 (D) Only 4
- (185) Microlesson plans helps those teachers who are
 (1) Working as senior teacher in a school (2) When a teacher finds indiscipline in the class.
 (3) When there is a visit of guest in the school (4) when teacher is still a trainee.
 (A) 2 & 3 (B) 1 & 2 (C) Only 1 (D) Only 4
- (186) Research is a process based on
 (1) Observation. (2) Experience (3) Action (4) all the above
 (A) 1 (B) 2 (C) 1 & 3 (D) 4
- (187) Which among the following is not an essential characteristics of action research?
 (1) It is oriented towards a specific problem.
 (2) Its goal is to improve the given situation by improving action and decision.
 (3) It never needs the co-operation of other teachers.
 (4) It is carried out in a scientific manner.
 (A) 1 & 2 (B) 2 & 4 (C) Only 4 (D) Only 3
- (188) Social Science is related with...
 (A) Means of livelihood (B) Supply and consumption
 (C) Manufacturing of goods (D) All of these
- (189) What is Social studies?
 (A) Unified and independent subject (B) Intellectual and experimenting subject
 (C) Consequences of science practical's (D) None of these
- (190) Which of the following is not an aim of teaching social studies ?
 (A) Character building (B) Scrolling well (C) Good citizenship (D) Proper use of leisure
- (191) Study of economics includes ...
 (A) Services and manufacturing (B) Rights and duties
 (C) Problems of society (D) Past and evolution of humans
- (192) Environmental education should be taught in school as
 (A) We cannot escape from environment (B) It will effect environmental pollution
 (C) It is important part of life (D) It will provide job

- (193) Bloom's Taxonomy is a framework that classifies
- (A) Classroom management techniques (B) Student behaviour
(C) Level of cognitive learning (D) Educational resources
- (194) In social science reflective teaching is preferred to routine teaching because
- (A) It is a new idea hence popular
(B) It is guided by tradition and habit
(C) It is unresponsive to changing circumstances
(D) It implies flexibility analysis and social awareness
- (195) What is the purpose of formative assessment in social science education?
- (A) To determine students' final grades
(B) To assess students' prior knowledge at the beginning of a unit
(C) To provide feedback and guide instruction during the learning process
(D) To compare students' performance to national standards
- (196) What is the purpose of conducting a pilot study in social science research?
- (A) To refine the research design and procedures (B) To collect data from a large sample
(C) To establish statistical significance (D) To ensure random assignment of participants
- (197) Which of the following is an example of an experiential learning activity in social science?
- (A) Lecture based instruction (B) Group discussion
(C) Textbook reading (D) Multiple choice question
- (198) What is the main reason to conduct mock parliament in social science class in a school?
- (A) To develop some insights into the working of political institutions
(B) To remember political science concepts
(C) To mobilize funds for school
(D) To assess student's behaviour in
- (199) How can technology integration support social science teaching and learning?
- (A) It provides access to vast resources and information
(B) It eliminates the need for teacher involvement
(C) It reduces the importance of critical thinking skills
(D) It limits students engagement and active learning
- (200) Which of the following is a characteristic of a democratic government?
- (A) Rule by single leader with absolute power
(B) Citizens' participation in decision making through voting
(C) Government control over all aspects of the economy
(D) Social and economic equality for all citizens



Space for Rough Work

Space for Rough Work

પરીક્ષા પૂરી થયા બાદ ઉત્તરપત્ર (OMR SHEET) ખંડ નિરીક્ષકને ખુલ્લું (કવરમાં મુક્યા વગર) પરત કર્યા બાદ જ પરીક્ષા ખંડ છોડવાનો રહેશે. તેમ કરવામાં કસૂર થયેથી શિસ્તભંગના પગલાં ગણી પરીક્ષા માટે જે તે ઉમેદવારને ગેરલાયક ઠેરવવામાં આવશે.