

CEET-23

SET
A

Total Time : 150 Minutes

Total Marks : 120

SEAT No.

--	--	--	--	--	--

INSTRUCTIONS FOR STUDENTS

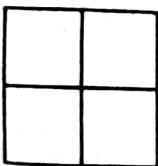
Please read the following instructions carefully and then answer the questions on OMR answer sheet only

1. All questions are compulsory.
2. The blank pages are given in this question booklet for rough work.
3. You must have to submit the OMR Sheet to the invigilator upon completion of the examination.
4. Please do not mark anything against the options A, B, C, D in the question booklet.
5. Please also carefully read OMR and Hall ticket instructions.

- (1) 14, 20, 25, 29, ? Fill in the blank space with given options.
 (A) 31 (B) 33
 (C) 34 (D) 32
- (2) 121, 100, 81, 64, ? Fill in the blank space with given options.
 (A) 25 (B) 49
 (C) 36 (D) 47
- (3) Hate : Love :: Enemy : ? Fill in the blank space with given option.
 (A) Devotee (B) Faithfull
 (C) Friend (D) Company
- (4) 2, 5, 10, 17, ? Fill in the blank space with given options.
 (A) 26 (B) 28
 (C) 27 (D) 25

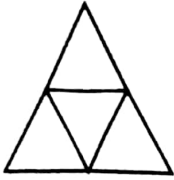
Instruction : For the questions below arrange the word in alphabet chronology and choose from given options.

- (5) BAG
 (A) GAB (B) GBA (C) GBA (D) BAG
- (6) ICE
 (A) CEI (B) ECI (C) IEC (D) CIE
- (7) ROHAN
 (A) AHNRO (B) AHRNO
 (C) AHRON (D) AHNOR
- (8) GOAT
 (A) AOGT (B) AGOT
 (C) TOGA (D) TOAG
- (9) In given image how many squares are shown?








- (A) 4 (B) 5 (C) 3 (D) 6

(10) In given image how many triangles are shown?





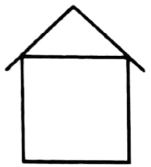

- (A) 6 (B) 3
(C) 4 (D) 5

Instruction : For the questions below given image indicate mirror image from optios.






- (11)  (A)  (B) 
(C)  (D) 

(12)








- (A)  (B) 
(C)  (D) 

(13)

-  (A)  (B) 
(C)  (D) 

(14)

-  (A)  (B) 
(C)  (D) 

(15) Yesterday has Wednesday after five days which day will fall?

- (A) Monday (B) Tuesday
(C) Wednesday (D) Thursday

(16) Meena is shorter than Teena, Teena is Larger Than Reena, tell who is tallest among all?

- (A) Teena (B) Meena
(C) Reena (D) Nobody

(17) 5, 11, 19, , 41 Fill in the blank space with correct option.

(A) 28

(B) 29

(C) 31

(D) 35

(18) Aeroplane : Pilot, Bus : ? Fill in the blank space with correct Options.

(A) Driver

(B) Passenger

(C) Stand

(D) CNG

Instruction : For the questions below, out of 4 words mentioned in options, Three words are related with each other, Wich word is different ?

(19)

(A) Kilometer

(B) Meter

(C) Mililiter

(D) Milimeter

(20)

(A) Hockey

(B) Cricket

(C) Vollyball

(D) Chess

(21)

(A) Jasmine

(B) Apple

(C) Banana

(D) Sapota

(22)

(A) Lake

(B) Pond

(C) River

(D) Hills

(23) In a line Sangita's number from right is 17 and from left is 34. how many students are in a line?

(A) 50

(B) 51

(C) 17

(D) 52

(24) How many thousand in one corore?

(A) 10

(B) 100

(C) 1000

(D) 10000

(25) Wich image is different from rest of three images?

(A)



(B)




(C)



(D)



- (26) Which month is different than rest of three months.
- (A) August (B) December
(C) March (D) November
- (27) How many minutes of 2.5 hrs?
- (A) 250 (B) 150
(C) 180 (D) 90
- (28) Total of two numbers is 28 and difference between these two numbers is 6, Indicate numbers from option?
- (A) 12, 18 (B) 13, 19
(C) 11, 17 (D) 12, 16
- (29) $7 : 56 :: 9 : \dots\dots\dots$ Fill in the blank space with given option ?
- (A) 72 (B) 90
(C) 81 (D) 99
- (30) Fill in the blank space with given option. Ink : Paper, ? : ?
- (A) Painting : Painter (B) Pen : Pencil
(C) Actor : Play (D) Chalkstick : Blackboard
- (31) Total Population of a city is 4.5 lakhs, proportion of male and female population is same Indicate total female population of the city?
- (A) 2,05,000 (B) 2,50,000
(C) 2,25,000 (D) 2,15,000
- (32) How many Right angles are shown in given image?
-  (A) 4 (B) 3
(C) 0 (D) 2
- (33) Rate of 1 Kg green pulse is Rs. 120/- What will be the rate of $\frac{1}{4}$ Kg green pulses?
- (A) 40 (B) 30
(C) 60 (D) 80
- (34) Which is not common factor of 12 and 30 ?
- (A) 2 (B) 3
(C) 4 (D) 5

- (35) Paisa 5 is how many parts of Rs. 1 ?
- (A) $\frac{5}{10}$ (B) $\frac{5}{1}$
(C) $\frac{5}{20}$ (D) $\frac{1}{20}$
- (36) A Rectangle is having perimeters of 40 cms and breadth of 5 cms what will be area of rectangle?
- (A) 50 sq cm (B) 75 sq cm
(C) 60 sq cm (D) 200 sq cm
- (37) In a hostel total 175 Liter milk is consumed every month, During June - 2022 to November - 2022 How much milk was consumed ?
- (A) 1750 Liter (B) 1350 Liter
(C) 1050 Liter (D) 1250 Liter
- (38) How many meters are in 6.5 kms?
- (A) 650 meters (B) 650 Kms
(C) 6500 milimeters (D) 6500 meters
- (39) A train runs at a speed by 65 kms per hour, How many kms it will travel in 5 hrs?
- (A) 315 kms. (B) 375 kms.
(C) 335 kms. (D) 325 kms.
- (40) Prerna sleeps 6 hrs. per day, In a week how many hrs. she will sleep?
- (A) 42 hrs. (B) 45 hrs.
(C) 48 hrs. (D) 36 hrs.
- (41) Wich values more?
- (A) 11 coins of Rs.1 (B) 5 coins of Rs. 2
(C) 2 coins of Rs.5 (D) 1 coin of Rs.10
- (42) Which certified unit is for measuring liquid quantity?
- (A) gm (B) kg
(C) litre (D) second
- (43) Cost of two note books are Rs. 50 and Rs. 30 respectively, what is the differance cost of there note books?
- (A) Rs. 80 (B) Rs. 20
(C) Rs. 50 (D) Rs. 30


- (44) A Triangle having 3 sides of 10 cms, 12 cms and 13 cms, what will be perimeters of Triangle?
 (A) 35 cms (B) 45 cms
 (C) 25 cms (D) 48 cms
- (45) $9872 \div 8$ Divide.
 (A) 1234 (B) 3412
 (C) 1134 (D) 1334
- (46) Write the following numbers using digits.
 Four thousand seven hundred and one
 (A) 4701 (B) 4107
 (C) 7401 (D) 1407
- (47) 8321 (Add)
 $+ 8485$
 (A) 15806 (B) 16866
 (C) 16806 (D) 16756
- (48) $10315 - 1245$ (Subtract)
 (A) 11560 (B) 1070
 (C) 9070 (D) 8070
- (49) There are five person in a room, 5 pieces of an apple is equally distributed among five person, How much portion is consumed by an individual of apple?
 (A) $\frac{1}{4}$ (B) $\frac{1}{5}$
 (C) $\frac{1}{2}$ (D) $\frac{1}{3}$
- (50) The sum of the lengths of all sides of the figure of a closed figure is
 (A) Perimete (B) Area
 (C) Circumference (D) Volume
- (51) $132 \times 12 = \dots\dots\dots$ (multiply)
 (A) 1684 (B) 1584
 (C) 1320 (D) 264
- (52) During August 4 Students Referred books, as shown here.....
 Zarana - 10 Kavya - 15
 Prerana - 05 Hetal - 20
 How books referred by Zarana can be reflected?
 (A) Half of books refred by Hetal (B) 50% less than Kavya
 (C) Double books than Hetal (D) Four time than Prerana

- (53) What is the place value of 3 in 123456?
 (A) 300 (B) 30000
 (C) 3000 (D) 3
- (54) Which is smallest natural number ?
 (A) 0 (B) 1
 (C) -1 (D) 0.1
- (55) What will be the diameter of a circle with 40 cm. radius ?
 (A) 20 cm. (B) 20 meter
 (C) 80 meter (D) 80 cm.
- (56) Which number comes after smallest number of 4 digit number?
 (A) 111 (B) 1111
 (C) 1001 (D) 1000
- (57) In pair of numbers, in which pair first number is 200 times more than second number?
 (A) 300, 500 (B) 400, 300
 (C) 535, 435 (D) 805, 605
- (58) Which number is coming in between 15000 to 20,000?
 (A) 180000 (B) 18095
 (C) 1999 (D) 20001
- (59) How to write 60.08?
 (A) $6 + \frac{8}{10}$ (B) $60 + \frac{8}{10}$
 (C) $60 + \frac{8}{100}$ (D) $6 + \frac{8}{1000}$
- (60) Which number is divided by 3 ?
 (A) 31 (B) 13
 (C) 21 (D) 23
- (61) Many children brought cameras on the picnic.
 Put proper possessive adjective in the blank.
 (A) there (B) their
 (C) our (D) you
- (62) Laksh for home just now. Put a verb form.
 (A) has left (B) left
 (C) is left (D) leaves
- (63) Find the odd one out from the following.
 (A) Shiny (B) Gleaming
 (C) Smooth (D) Bright

- (64) Select a word nearest in meaning to the word : advent
 (A) beginning (B) departure
 (C) start (D) arrival
- (65) Put proper pronoun in the blank. I am a student and these books are.....
 (A) my (B) ours
 (C) mine (D) yours
- (66) A fleet is
 Choose the correct option.
 (A) a collection of sticks (B) a collection of ships
 (C) a collection of books (D) a group of persons
- (67) Mukesh is often compared Manish.
 Put proper proposition.
 (A) to (B) with (C) by (D) at
- (68) What is the plural of word : dwarf
 (A) dwarves (B) dwarf
 (C) dwarfes (D) dwarfs
- (69) A of bees. Put proper collective noun.
 (A) gang (B) swarm
 (C) flock (D) herd
- (70) The chair faded, warm and in some places even torn.
 Identify the underlined word.
 (A) adverb (B) noun
 (C) adjective (D) verb
- (71) Select sentence nearest in meaning.
I will help you cope.
 (A) I will do things for you. (B) I will add to your confidence.
 (C) I will make you police. (D) I will help you face the situation.
- (72) My mother when my uncle came to my house. Put proper verb fom.
 (A) was cooking (B) cooked
 (C) cooks (D) is cooking
- (73) Akbar ruled in Delhi.
 Select the most appropriate question for the underlined word / phrase as answer.
 (A) What did Akbar rule? (B) Where does Akbar rule?
 (C) When did Akbar rule? (D) Where did Akbar rule?

- (74) Select an antonym for a word : efficient
- (A) unefficient (B) inefficient
(C) nonefficient (D) ilefficient
- (75) If it is 9:45 in the clock then it is called
- (A) quarter past ten (B) quarter to ten
(C) quarter to nine (D) quarter past nine
- (76) Find out unmatched pair of synonyms.
- (A) rage - anger (B) vision - sight
(C) drag - push (D) sacred - holy
- (77) select correct spelling
- (A) trigonometry (B) triganometry
(C) trigonametry (D) triganemetry
- (78) Find out improper chain of degree words :
- (A) Tall - Taller - Tallest (B) Rich - Richer - Richest
(C) beautiful - beautifuler - beautifullest (D) Strong - Stronger - Strongest
- (79) If you work hard, you good marks.
Put proper verb in the blank.
- (A) get (B) have got
(C) got (D) will get
- (80) How many days a week? Fill in the blank with correct word.
- (A) has (B) will have
(C) have (D) had
- (81) Which of the following habit is good?
- (A) Satyam stores rain water. (B) Neha cleans body parts in water tank.
(C) Dhruv does not close water tap. (D) Deep breaks water pipe.
- (82) Which statement is wrong?
- (A) Horse, elephant etc. are there in the game of chess.
(B) 52 cards are there in plaing cards.
(C) Games can be played in mobile.
(D) Playground is needed to paly carrom.
- (83) How many numbers are there in Pincode?
- (A) 4 (B) 5
(C) 6 (D) 7

- (84) Make proper pairing.
- | (A) | (B) |
|----------------------------|----------------------------|
| a. Extreme heat | (i) Rajasthan |
| b. Heavy rainfall | (ii) Shikara |
| c. House boat | (iii) Manali |
| d. Heavy snowfall | (iv) Assam |
| (A) a-iii, b-iv, c-ii, d-i | (B) a-i, b-iv, c-ii, d-iii |
| (C) a-iv, b-i, c-iii, d-ii | (D) a-i, b-ii, c-iii, d-iv |
- (85) Find the odd one out?
- | | |
|----------------|-------------|
| (A) Turmeric | (B) Cabbage |
| (C) Asafoetida | (D) Celery |
- (86) Frock of Jharna is teared, from where will she stitch it?
- | | |
|--------------|---------------|
| (A) Mechanic | (B) Carpenter |
| (C) Tailor | (D) Coblar |
- (87) Which of the following item is not made from wheat.
- | | |
|--------------|-------------|
| (A) Biscuite | (B) Chapati |
| (C) Bread | (D) Pulav |
- (88) Which terminology is used for Petrol, Diesel and Crudeoil?
- | | |
|-----------------|----------|
| (A) CNG | (B) LPG |
| (C) Mineral oil | (D) Coal |
- (89) Which flower blooms on plant?
- | | |
|------------------|------------|
| (A) Honey suckle | (B) Rose |
| (C) Lotus | (D) Palash |
- (90) How is baby elephant is ideantified with popular name?
- | | |
|--------------|-----------|
| (A) Madaniyu | (B) Fawn |
| (C) Chick | (D) Puppy |
- (91) Mahesh resides in palanpur city, due to heavy rain fall roads are washed out and got damaged, In this regard to whom is complain to be made for road repair?
- | | |
|---------------------------------|---|
| (A) Police station near to home | (B) Main traffic police station of city |
| (C) Office of Nagar Nigam | (D) Meterological department |
- (92) From where do fishes of sea inhale oxygen for respiration?
- (A) Fishes inhale oxygen from water soluble oxygen.
- (B) Fishes come to sea surface to inhale oxygen.
- (C) Fishes inhale oxygen from sea bottom.
- (D) Oxygen is not required to fishes for respiration.

- (93) Which is far away from us?
 (A) Flying plane (B) Flying crow
 (C) Moon (D) Cloud
- (94) Which object is made with the help of bacteria?
 (A) Soap (B) Adible oil (C) Powder (D) Eard
- (95) How do we know that cooking gas is leaking?
 (A) Due to color of cooing gas.
 (B) Typical smell of cooking gas.
 (C) Specific particles of cooking gas.
 (D) Due to spread of liquid drops from cylinder.
- (96) During Summer why should white colours clothes are preferred over dark coloured clothes?
 (A) Sun light - reflects better by light coloured clothes rather dark coloured clothes.
 (B) White colour clothes are cheaper.
 (C) To wear white colour clothes is comfortable.
 (D) White coloured clothes easy to wash.
- (97) Which unit is the best to measure distance between Ahmedabad to Surat?
 (A) kilolitre (B) kilometer
 (C) Mililitre (D) Milimeter
- (98) In order to resolve problem of wasteland of village, whom should we meet?
 (A) MP of village (B) MLA of village
 (C) Nagarapati of village (D) Sarpanch of village
- (99) What should we do to maintain health in daily routine?
 (A) eat more than actual hunger (B) to do brush
 (C) change cloth thrice in a day (D) grow nails
- (100) Which of the following state is connecting with sea?
 (A) Madhyapradesh (B) Punjab
 (C) Uttar pradesh (D) Gujarat
- (101) विलोम शब्द की गलत जोड़ पहचानिए ।
 (A) अंदर - बहार (B) ऊपर - नीचे
 (C) बेईमान - नेक (D) उठना - चलना
- (102) दिए गए संकेत को पहचानिए ।
 (A) संकरा सेतु । (B) धुम्रपान निषेध ।
 (C) आगे मोड है । (D) नो पार्किंग ।

(103) अधूरे वाक्य पूर्ण कजिए ।

हम

(A) पढ़ें ।

(B) पढ़ते ।

(C) पढ़ना चाहते हैं ।

(D) पढ़ता है ।

(104) रेखांकित किया गया शब्दका उपयोग करके रिक्त स्थान की पूर्ति कीजिए ।

पोरबंदर गाँव में लोग हमेशा शांति से (रहता)

(A) रहते हैं ।

(B) रह रहा था ।

(C) रहा ।

(D) रहना ।

(105) नीचे दिए गए शब्दों की गलत जोड़ पहचानिए ।

(A) ताँगा - धोड़ागाड़ी

(B) बैलगाड़ी - बण्डगाड़

(C) हेलिकोप्टर - डेलिक्रोप्टर

(D) विमान - उडनपटोला

(106) नीचे दिए गए अंक की अंग्रेजी अंक के विकल्प की गलत जोड़ पहचानिए ।

(A) २९ - 26

(B) १६ - 16

(C) १४ - 14

(D) ९ - 9

(107) अधूरे वाक्य पूर्ण कीजिए ।

बच्चे खेल

(A) रहे हैं ।

(B) रहता था ।

(C) रहा है ।

(D) रहते थे ।

(108) अंक एवं शब्दों की गलत जोड़ पहचानिए ।

(A) ४९ - उनचास

(B) १६ - छब्बीस

(C) ३९ - उनतालीस

(D) २९ - उनतीस

(109) रिक्त स्थान की पूर्ति कीजिए ।

हमें खिलौना चाहिए ।

(A) कैसे

(B) केस

(C) किसने

(D) कैसा

(110) गलत जोड़ पहचानिए ।

(A) ग्वारफली - गुवारसींग

(B) परवर - परवण

(C) अदरक - अणवी

(D) तुरई - तुरियुं

(111) धड़ना लोटमांथी ऊँ वानगी बनती नथी ?

(A) रोटली

(B) पुलाव

(C) लाडु

(D) सुपडी

- (112) દૂધમાંથી શું નથી બનતું ?
(A) દહીં (B) કુલ્ફી
(C) ખીર (D) સમોસા
- (113) હું શાળાએ જઈ શકું તેમ નથી. મેં રજા ચિટ્ટી આપી છે.

Fill in the blank with proper option

- (A) શિક્ષકની (B) શિક્ષકને
(C) શિક્ષક વડે (D) શિક્ષકથી
- (114) તમારી બહેનના પપ્પાના નાનાભાઈ તમારાં શું થાય ?
(A) મામા (B) દાદા
(C) માસા (D) કાકા
- (115) નીચેનામાંથી કઈ ક્રિયા સારી છે ?
(A) અંધ માણસને રસ્તાની સામી બાજુ લઈ જવા.
(B) ગંદા પાણીનો નિકાલ ન કરવો.
(C) રસ્તામાં ફૂટપાથ પર ન ચાલવું.
(D) કાગળનો બગાડ કરવો.
- (116) લોચો મારવો - રૂઢિપ્રયોગનો અર્થ શું થાય ?
(A) બિનજરૂરી ઉમેરો કરવો (B) ઊંઘ આવી જવી
(C) નવા શબ્દો શોધવા (D) ગોટાળો કરવો
- (117) તરસ્યાને તો દરિયાથીયે લોટો લાગે મોટો - નો અર્થ શું થાય ?
(A) તરસ લાગે એટલે લોટા વડે દરિયાનું પાણી પી લેવું.
(B) તરસ લાગે ત્યારે દરિયાના પાણી કરતા લોટાનું મીઠું પાણી વધુ ઉપયોગી બને.
(C) તરસ લાગે ત્યારે દરિયાનું પાણી પી શકાતું નથી.
(D) તરસ લાગે એટલે દરિયો જ કામ આવે.
- (118) ડાંગ : ડાંગી :: જામનગર : _____ ?
Fill in the blank with proper option
(A) જામનગરીયા (B) જામનગરીકા
(C) જામનગરી (D) જામનગરીકે
- (119) સાચી જોડણી શોધો.
(A) પૂસ્તક (B) પુસ્તક
(C) પુસતક (D) પુસ્ત્ક
- (120) તમે છે ? Fill in the blank with proper option
(A) કોણ (B) કોનું
(C) ક્યારે (D) કેવું

પરીક્ષા પૂરી થયાબાદ OMR શીટ ખંડ નિરીક્ષકને પરત કર્યા બાદ જ પરીક્ષા ખંડ છોડવાનો રહેશે. તેમ કરવામાં કસૂર થયેથી શિસ્તભંગના પગલા લઈ પરીક્ષા માટે જે તે ઉમેદવારને ગેરલાયક ઠેરવવામાં આવશે.